

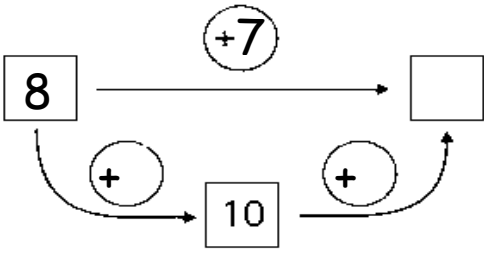


Όνομα: _____

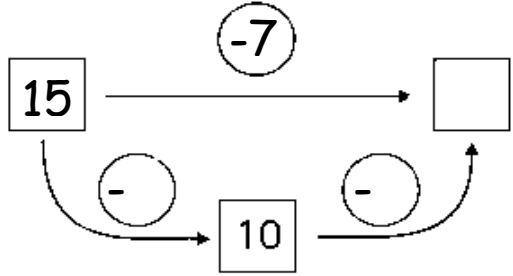
Υπολογίζω και συμπληρώνω τους αριθμούς και τις γραμμές που λείπουν.

<div style="border: 1px solid black; padding: 5px; display: inline-block; margin-bottom: 10px;">$8+9=17$</div>	<div style="border: 1px solid black; padding: 5px; display: inline-block; margin-bottom: 10px;">$17-9=8$</div>
<div style="border: 1px solid black; padding: 5px; display: inline-block; margin-bottom: 10px;">$7+6=$</div>	<div style="border: 1px solid black; padding: 5px; display: inline-block; margin-bottom: 10px;">$13-6=$</div>

$$8+7=$$

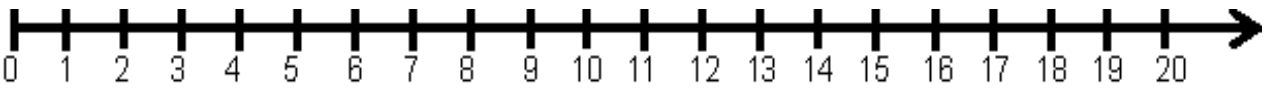


$$15-7$$



+

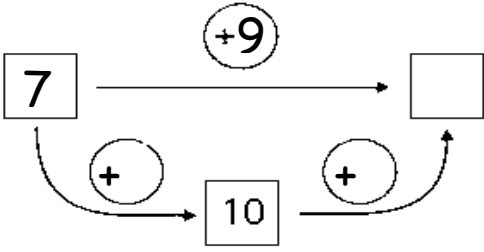
+



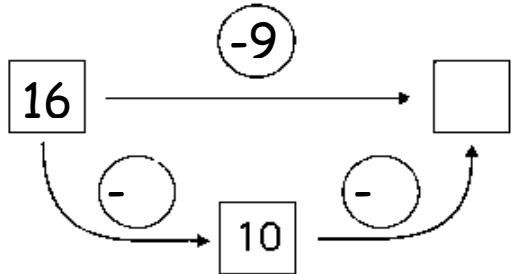
-

-

$$7+9=$$

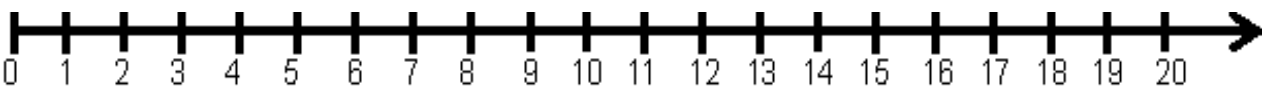


$$16-9=$$



+

+



-

-

